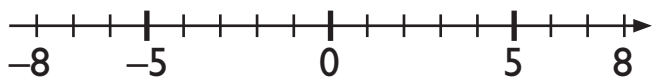
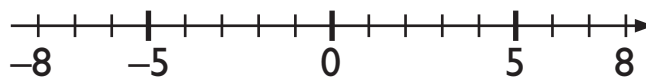


Kopieringsunderlag 40a: Räkna med negativa tal

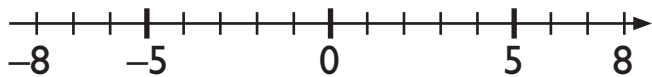
1. Rita uppgifterna på tallinjen. Skriv svar.



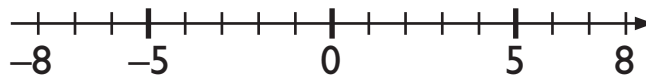
a. $1 - 4 =$ _____



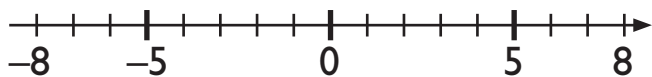
b. $-2 + 3 =$ _____



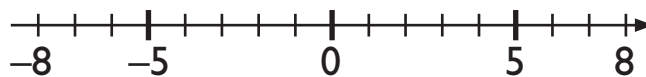
c. $2 - 7 =$ _____



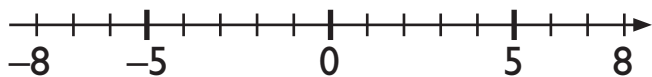
d. $-1 + 4 =$ _____



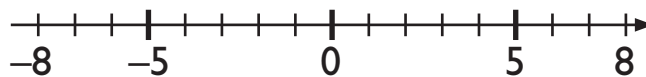
e. $0 - 5 =$ _____



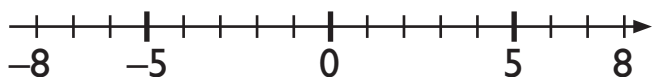
f. $-5 + 2 =$ _____



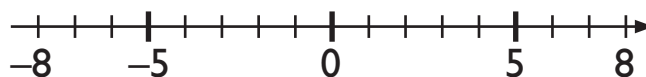
g. $-2 - 3 =$ _____



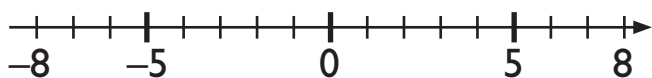
h. $-3 + 3 =$ _____



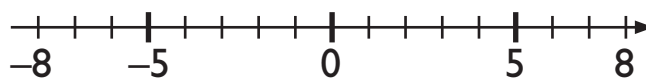
i. $-1 - 7 =$ _____



j. $-7 + 3 =$ _____



k. $-3 - 3 =$ _____



l. $-5 + 6 =$ _____